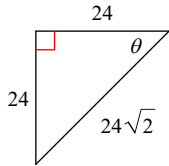


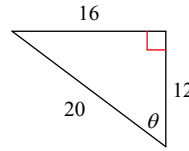
Unit 5 WS 2: Soh-Cah-Toa

Find the value of the sine, cosine and tangent of the triangle shown.

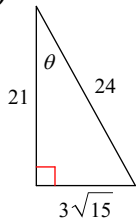
1) $\sin \theta$



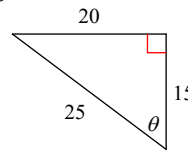
2) $\sin \theta$



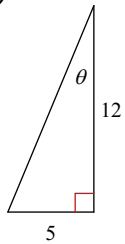
3) $\cos \theta$



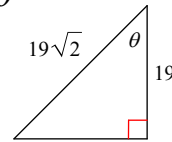
4) $\cos \theta$



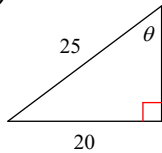
5) $\sin \theta$



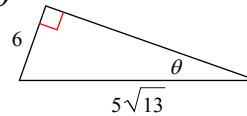
6) $\tan \theta$



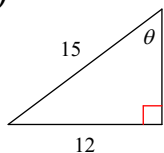
7) $\sin \theta$



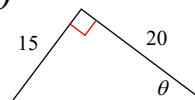
8) $\sin \theta$



9) $\cos \theta$



10) $\sin \theta$



Find the measure of each side indicated. Round to the nearest tenth.

